

8. Transposing up a Minor 3rd

1. Which instrument uses minor 3rd transposition?

☐ Trumpet ☐ Clarinet in Bb ☐ Clarinet in A ☐ French Horn

2. Circle the correct note to complete the interval.

a) A minor 3rd above C is _____

Eb E F Fb

b) A minor 3rd above D is _____

F F# E C




c) A minor 3rd above G is _____

Bb C B Cb




d) A minor 3rd above F is _____

A Ab C B

3. Write a note a minor 3rd above.



4. Transpose each key signature up a minor 3rd.



5. Transpose each melody up a minor 3rd.

A blank musical staff with a treble clef. The staff consists of five horizontal lines. The treble clef is positioned at the beginning of the staff, with its hook pointing upwards. The staff is empty, with no notes or other markings.

E Minor

D Minor

C Minor

C# Minor